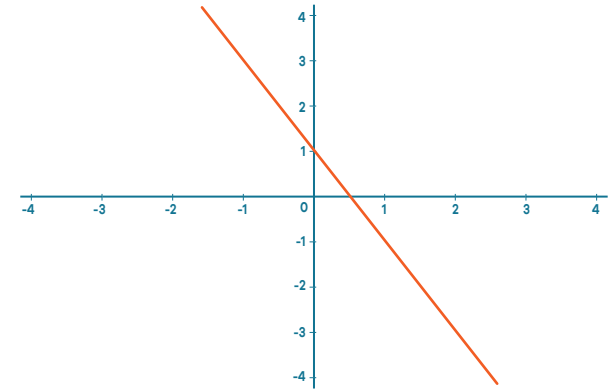




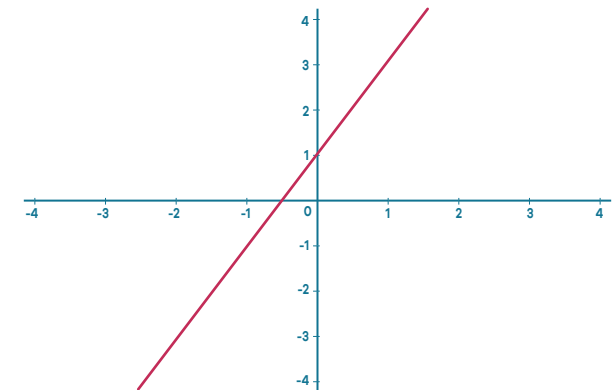
x	0	1	2	3	4
y	1	-1	-3	-5	-7

$$y = -2x + 1$$



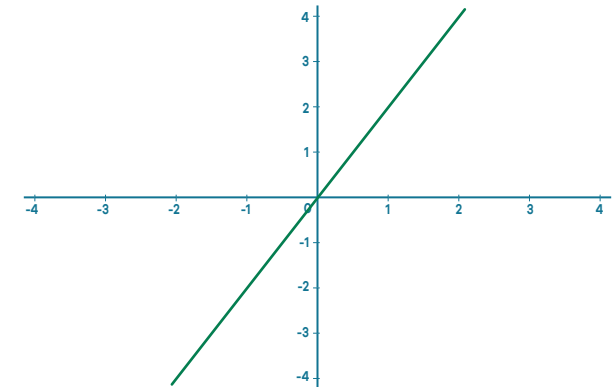
x	0	1	2	3	4
y	1	3	5	7	9

$$y = 2x + 1$$



x	0	1	2	3	4
y	0	2	4	6	8

$$y = 2x$$

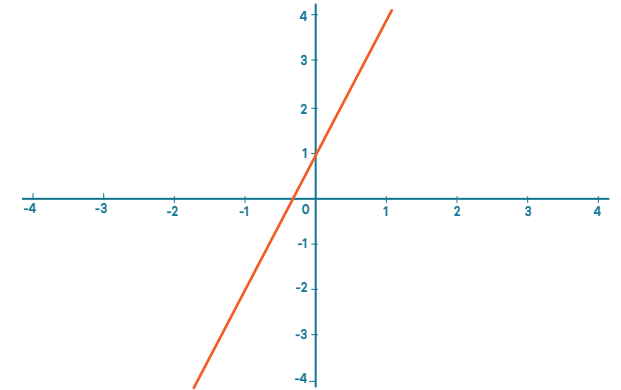


Find my triplet - Worksheet 1



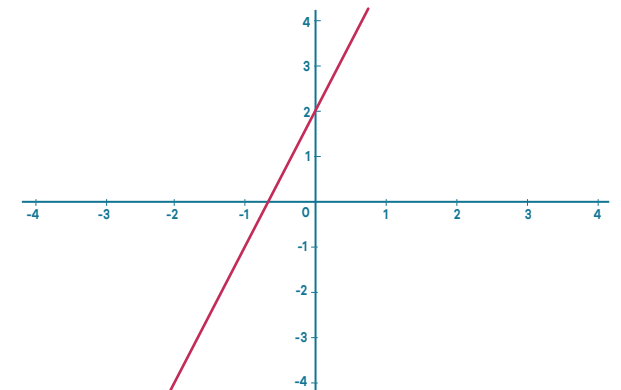
x	0	1	2	3	4
y	1	4	7	10	13

$$y = 3x + 1$$



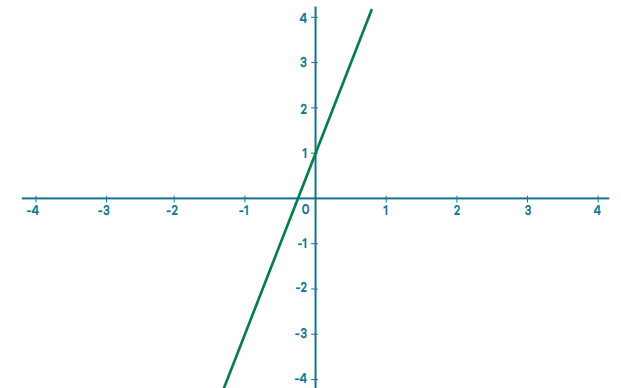
x	0	1	2	3	4
y	2	5	8	11	14

$$y = 3x + 2$$



x	0	1	2	3	4
y	1	5	9	13	17

$$y = 4x + 1$$

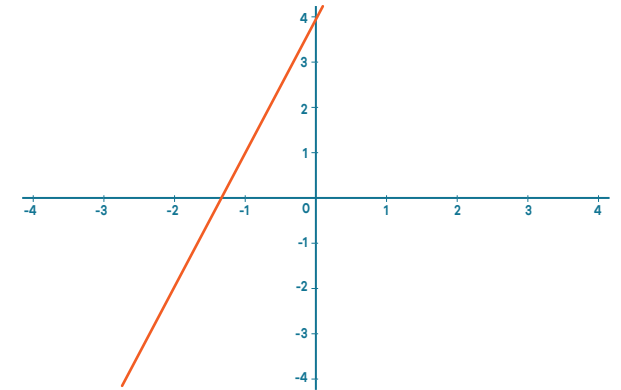


Find my triplet - Worksheet 1



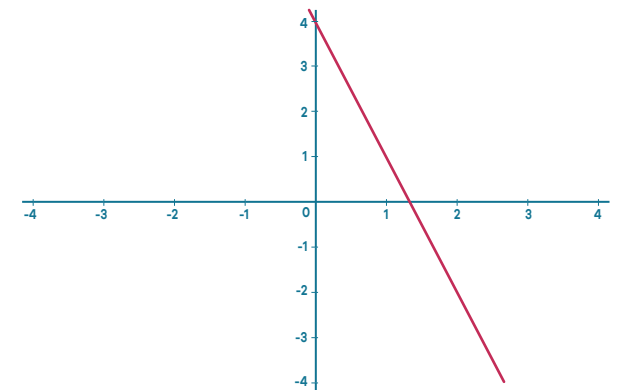
x	0	1	2	3	4
y	4	7	10	13	16

$$y = 3x + 4$$



x	0	1	2	3	4
y	4	1	-2	-5	-8

$$y = -3x + 4$$



x	0	1	2	3	4
y	1	1.5	2	2.5	3

$$y = \frac{1}{2}x + 1$$

